


half past , a quarter & o'clock

Name: _____

Class: _____


Write the time shown below each clock.



1. half past 12



2.




3.



4.



5.




6.



7.



8.



9.
